

RAMA DEVI INTERNATIONAL SCHOOL

SESSION 2025-26



CLASS - IV

Dear parents and students,

Summer vacation is around the corner bringing with itself a much needed respite

from hectic school days . We hope that you will thoroughly enjoy the vacations and make the most of this summer. While it is indeed important that you relax and refresh yourselves. It is also important that you exercise your minds.

Keeping this in mind, we have designed various exciting activities to keep the student engaged and active during the summer vacation. These fun project assignments would enhance learning skill help understand concepts, better and make for a great crash aimed at improving academic output.

These activities will not only help you to revise what you taught, but will also enrich your knowledge. The project will be assigned as subject enrichment activity portfolio or Art Integrated Activity.




We encourage parents to and support the students to ensure the given work is completed in time to be the best of their ability. Your support and encourage both have a use impact on your child's learning ability.

Wish you a fun field safe summer vacation.

English

Q1. THINK AND WRITE:

Certain quality have been listed against each of these characters from the story. Identify these characters and give a reason to justify each quality. (analytical thinking)

 Reason		 Reason		 Reason	
loyal		caring		wicked	
bold		intelligent		selfish	
valiant		emotional		scheming	
intelligent		afraid		dangerous	
curious		friendly		protective	

**Q2. Complete the story using the simple forms of the verbs given
Bracket**

A monkey _____ (live) on a berry tree. The tree was by the bank of a river. In the river, there lived a crocodile.

One day, the monkey _____ (pick) some berries.

Then, he _____ (drop) them in the river. The crocodile loved the berries.

Every day, the monkey _____ (wait) for the crocodile to come. Then he dropped the berries for him. Soon they became friends.

One day, the crocodile _____ (ask) the monkey to come for a ride on the river. Every day, the two would go on a ride on the river.

Then, one day, the crocodile said to the monkey, 'Dear Monkey, my wife is ill. She _____ (need) your heart. So, I am taking you to my home. My wife _____ (eat) your heart up.'


The monkey was afraid. But he had an idea.

He said, 'O, Crocodile! I _____ (leave) my heart on the tree when I go out. Take me back so that I can bring it for her.'

So the crocodile _____ (turn) back.

Once they _____ (reach) the bank of the river, the monkey jumped off his back and he quickly _____ (climb) on to the tree.

The monkey said, 'O Foolish Crocodile! My heart is with me. I am no longer your friend. And no more berries for you.'



Q3. POSTER MAKING TIME:

Make a fine poster on 'HEALTH IS THE GREATEST WEALTH'. (art integration)

Q4. Do daily a page of writing to improve hand writing.

SUBJECT – SCIENCE

Instruction: *Following work to be done in science notebook.*

Write and learn the definitions of the following terms:

- Adaptation
- Terrestrial plants
- Photosynthesis
- Aquatic plants
- Insectivorous plants
- Chlorophyll
- Leaf blade
- Stomata
- Habitat
- Camouflage

Art Integrated Activity (1.2.3)

Be a Nature Admirer

Plants provides us with so much oxygen, food, paper, beautiful flowers etc. How can plants be so diverse and survive in different climates?

Explore the amazing and beautiful world of plants

Paste pictures or leaves of plant found in different climates and write their characteristics. (Any three characteristics of each plant on single comment sheet, use art set for pictures)

Use the following heads:

- (a) Desert plants
- (b) Hilly plants
- (c) Plain area plants
- (d) Aquatic plants
- (e) Marshy area plants



Project work

Be your own Dietician

Make your own diet chart for a week on an art sheet.

Take interview of three relatives (1 grandparent, 1 parent, 1 sibling) and ask about the meals they eat. Prepare a report on A4 sheet about their eating habits.

Name	Meal 1	Meal 2	Meal 3	Conclusion

SUBJECT – MATHEMATICS

Instruction: Following work to be done in Mathematics notebook.

Q1. Multiple Choice Questions.

- (a) Which of the following is equal to 2025?
- (a) 1000 more than 1025 (b) 25 more than 2000
(c) 975 less than 3000 (d) all of these
- (b) A number is 2000 more than 896. What is the number?
- (a) 8296 (b) 8962
(c) $2000 + 800 + 90 + 6$ (d) $2000 + 900 + 80 + 6$
- (c) The number in which the place value of 5 is 50000 =
- (a) 51,098 (b) 11,567
(c) 42,453 (d) 93,425
- (d) A bakery had 8040 cupcakes. They sold 4050 cupcakes. How many cupcakes are left?
- (a) 4980 (b) 3990
(c) 4700 (d) 1678
- (e) The number 5,00,002 can be written as:
- (a) $5000 + 200$ (b) $500000 + 2$
(c) $500 + 20$ (d) $5000 + 200$

Q2. Fill in the missing numbers.

1101			1104				1108		1110
1111					1116				1120
		1123						1129	
1131			1134				1138		
					1146				1150

Q3. Crack this.

The pin code represents a system which divides the country into different regions, so for better communication codes are given to different cities.

Find the pin code of Ghaziabad, Lucknow, Delhi, and Kanpur.



- (a) Present the above data in a tabular form.
- (b) Write the sum of all four pin codes.
- (c) Find the difference between the greatest and the smallest pin code.

Q4. Do practice of tables, addition, subtraction, multiplication and division.

ART INTEGRATED ACTIVITY (1.4.4)

- Make a handmade abacus model. (Roll no. 1- 8)
- Make a robot model using different shapes. (Roll no. 9- 16)
- Make a tree model representing Even and Odd numbers. (Roll no. 17- 24)

Here are some examples which can help you to make the models.



SUBJECT – SOCIAL STUDIES

Instruction: Following work to be done in social studies notebook.

Q1. Find out which state is called the food bowl of India. Why is it called so? Support your project with pictures and relevant information.

Q2. Pick any 2 states and compare their weather condition, clothes, food, crops, occupations, spoken languages etc.

Q3. Do the given worksheet:

2. Match the following:


a)	Madhya Pradesh	i)	Chennai
b)	Andhra Pradesh	ii)	Raipur
c)	Tamil Nadu	iii)	Ranchi
d)	Chhattisgarh	iv)	Amravati
e)	Jharkhand	v)	Bhopal

3. Observe the given picture and answer the questions that follow:

i) What is shown in the picture?
ii) Which state is it associated with? Name its capital.
iii) Write any two special features of this place.

4. Who am I?

a) I am the financial capital of India.
b) I am the dam created on the river Krishna.
c) I am known as the Heart of India.
d) Hyderabad is my capital.
e) I am the meeting point of the Western Ghats and the Eastern Ghats.



ART INTEGRATED ACTIVITY (1.1.3)

1. Rivers are our lifeline. yet we are constantly polluting the rivers which is leading to numerous problems. Conduct research and find out ways to prevent the pollution of rivers.

2. The Southern Plateau of India is known for its rich biodiversity. Create a poster highlighting the importance of preserving and conserving the environment in this region. Write down three things you can do to help project it.

SUBJECT – Computer

Instruction: Following work to be done in social studies notebook.

Q1. Write the functions of following shortcut keys

1. Ctrl+A
2. Ctrl+C
3. Ctrl+V
4. Shift+Home
5. Shift+End

Q2. What are the different ways to select a text in MS world?

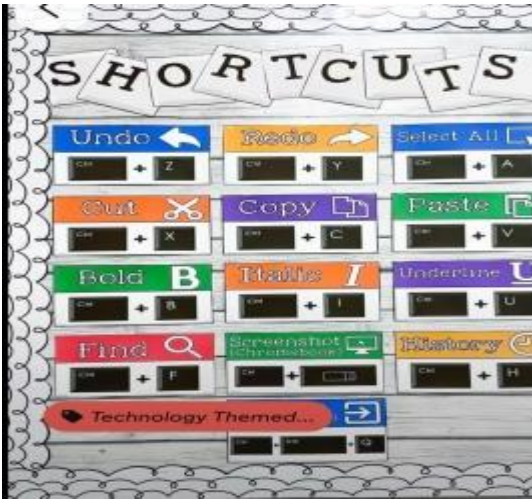
Q3. Do the given worksheet in computer notebook?

A. Tick (✓) the correct options.

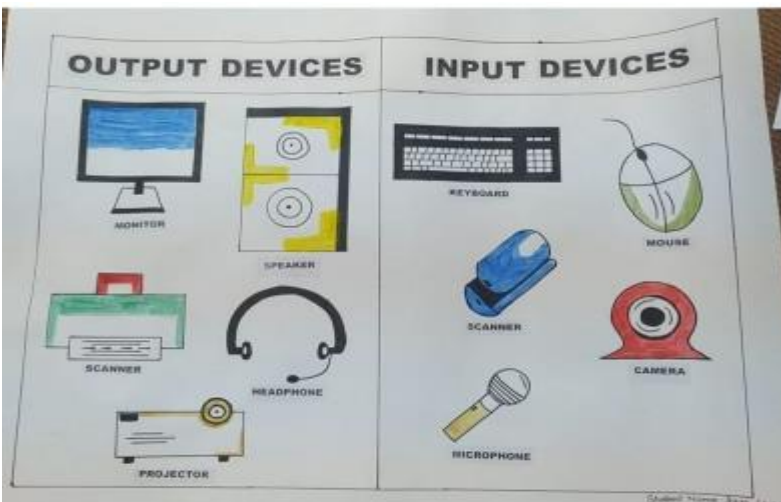
1. Which of the following is a word processing software?			
a. MS Word	<input type="checkbox"/>	b. CorelDraw	<input type="checkbox"/>
c. Tux Paint	<input type="checkbox"/>	d. Paint	<input type="checkbox"/>
2. A blinking vertical line that indicates where text or an object will be inserted is called			
a. texture	<input type="checkbox"/>	b. cursor	<input type="checkbox"/>
c. ribbon	<input type="checkbox"/>	d. pointer	<input type="checkbox"/>
3. The shortcut key combination to select the entire document is			
a. Ctrl + D	<input type="checkbox"/>	b. Ctrl + A	<input type="checkbox"/>
c. Ctrl + S	<input type="checkbox"/>	d. Ctrl + Click	<input type="checkbox"/>
4. Which function is performed to reverse the action of an earlier action?			
a. Redo	<input type="checkbox"/>	b. Undo	<input type="checkbox"/>
c. Align	<input type="checkbox"/>	d. Format	<input type="checkbox"/>
5. A wavy red line beneath one or more words indicates			
a. align disorder	<input type="checkbox"/>	b. troubleshooting	<input type="checkbox"/>
c. spelling error	<input type="checkbox"/>	d. grammatical error	<input type="checkbox"/>

ART INTEGRATED ACTIVITY (1.4.4)

- Make a handmade poster for output and input devices. (Roll no. 1- 8)
- Make a collage for parts of computer. (Roll no. 9- 16)
- Make a Poster on shortcut keys of computer. (Roll no. 17- 24)



Here are some examples which can help you to make the models.



SUBJECT – GK

Instruction: Following work to be done in social studies notebook.

Q1. As green plants are an important part of our ecosystem. Right few lines about the following green plants?

- Crocus
- Snapdragon flower
- Tropical climbing orchid
- Willow tree
- Elephant grass
- Rafflesia
- Baobab tree

Q2. Do the following questions in your GK book?

Wonderful Birds

People have always been curious to learn about birds. They love to do bird watching.

Q. Guess the names of the following birds.

1. This bird is found mostly in the southern hemisphere. It is a flightless sea bird. 

2. This is a small bird that lives in most of the Atlantic region. 

3. This bird is found in Australia, known for its ability to mimic different sounds. 

4. This bird is found in all tropical oceans in the world. Its male has striking bright red pouch. 

5. This bird migrates from the North Pole to the South Pole and back every year. It flies as well as glides through the air. 

6. It is a new world vulture found in South America. It is brilliantly coloured with varying hues on its head. 

Help Box

Arctic Tern, Emu, Penguin, Puffin, Frigate bird, Lyrebird, King Vulture

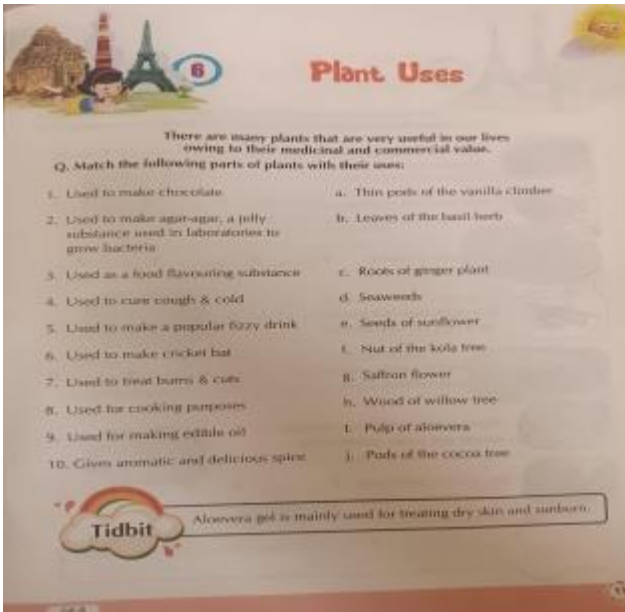
Tidbit

The most popular Puffin Island in the world is in Westman Isles.

14

gk-4

Q3. Do the following questions in your GK book?



ART INTEGRATED ACTIVITY (1.4.4)

Create a chart or poster with pictures and facts about famous monuments like the Eiffel Tower, Taj Mahal, Statue of Liberty, etc. (Roll no. 1- 12)

- Collect information and pictures about how different countries celebrate festivals (Diwali, Christmas, Chinese New Year, etc.). (Roll no. 13-24)

हिंदी

कला एकीकरण परियोजना 1.1.1.1

A3 सीट पर अरुणाचल प्रदेश के किन्हीं पांच लोक नृत्य के चित्र चिपकाकर उनके नाम लिखिए और उनके विषय में दो -

दो पंक्तियां लिखिए।

देश प्रेम पर आधारित एक कविता A4 साइज शीट पर लिखे और याद करें।

1 10 सुलेख अपनी उत्तर पुस्तिका में लिखें।

2 प्रत्येक दिन पठन व लेखन का अभ्यास करें।

3 पाठ 2 और 3 के प्रश्न उत्तर याद करें।

4 10 मुहावरे का अर्थ लिखकर वाक्य प्रयोग करें।

5 10 पर्यायवाची शब्द लिखें।